

# Fluent in Five

## Questions and Answers

Year 2

Week 33

## Year 2 – Week 33

### This week in a nutshell:

As children will now have completed their Key Stage 1 assessments, Five Fluent in Five will focus on the full range of questions from the Key Stage 1 curriculum. Therefore, questions covering addition, subtraction, multiplication, division and fractions will be present throughout the week.



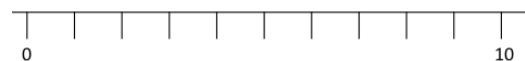
THIRD SPACE  
LEARNING

Year 2

Week 33 – Day 1

A.  $76 + ? = 80$


Use...



A number line

...to help you

B.  $8 \times 5 =$



You choose...

C.  $83 - 48 =$

...what to use...

...to help you



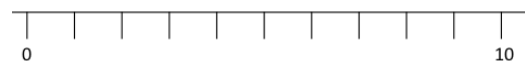
THIRD SPACE  
LEARNING

Year 2

Week 33 – Day 1 (Answers)

$$A. 76 + 4 = 80$$


Use...



A number line

...to help you

$$B. 8 \times 5 = 40$$



You choose...

$$C. 83 - 48 = 35$$

...what to use...

...to help you

# Fluent in Five

## Questions and Answers

Week 33

Day 2

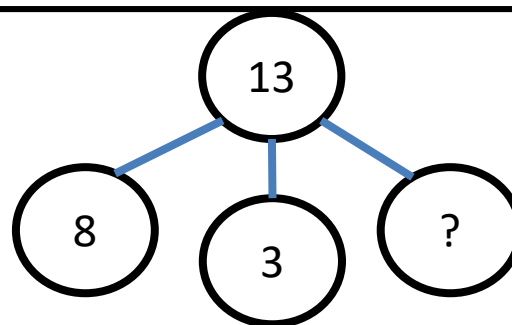
A.  $120 \div 12 =$

You choose...

...what to use...

...to help you

B.  $8 + 3 + ? = 13$



C.  $\frac{2}{4}$  of 22 =

Use...



Counters

...to help you



THIRD SPACE  
LEARNING

Year 2

Week 33 – Day 2 (Answers)

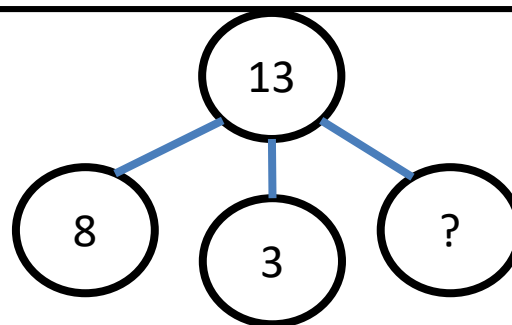
$$A. 120 \div 12 = 10$$

You choose...

...what to use...

...to help you

$$B. 8 + 3 + 2 = 13$$



$$C. \frac{2}{4} \text{ of } 22 = 11$$

Use...



Counters

...to help you

# Fluent in Five

## Questions and Answers

Week 33

Day 3


A.  $30 \div 5 =$

You choose...

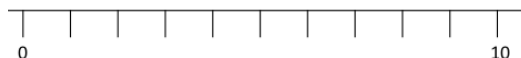
...what to use...

...to help you

B.  $? \times 8 = 40$



Use...



C.  $81 - 36 =$

A number line

...to help you



THIRD SPACE  
LEARNING

Year 2

Week 33 – Day 3 (Answers)


$$A. 30 \div 5 = 6$$

You choose...

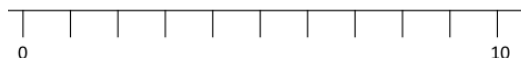
...what to use...

...to help you

$$B. 5 \times 8 = 40$$



Use...



A number line

$$C. 81 - 36 = 45$$

...to help you

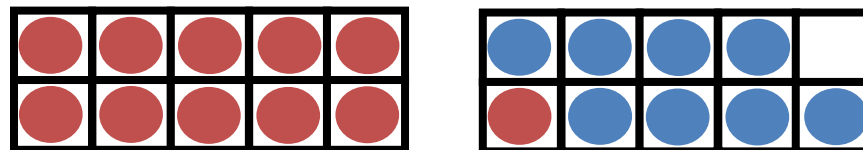
# Fluent in Five

## Questions and Answers

Week 33

Day 4

A.  $11 + 8 =$



You choose...

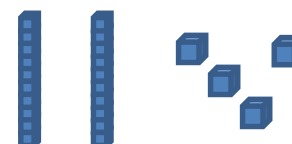
B.  $70 + ? = 100$

...what to use...

...to help you

Use...

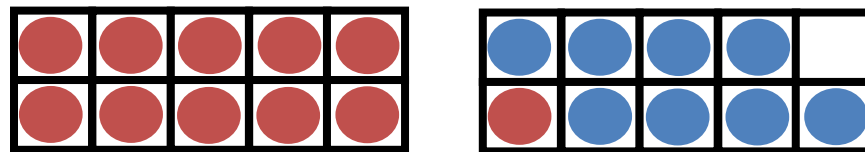
C.  $8 + 42 =$



Base 10

...to help you

A.  $11 + 8 = 19$



You choose...

B.  $70 + 30 = 100$

...what to use...

...to help you

Use...

C.  $8 + 42 = 50$



...to help you

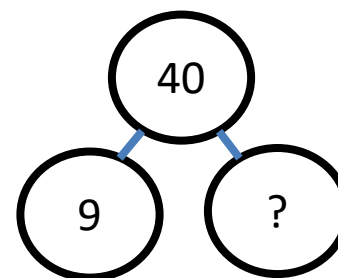
# Fluent in Five

## Questions and Answers

Week 33

Day 5

A.  $9 + ? = 40$



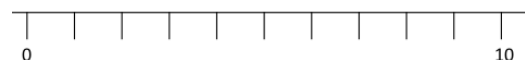
You choose...

B.  $87 - 38 =$

...what to use...

...to help you

Use...



C.  $80 - 45 =$

A number line

...to help you

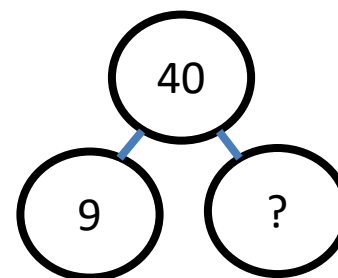


THIRD SPACE  
LEARNING

Year 2

Week 33 – Day 5 (Answers)

$$A. 9 + 31 = 40$$



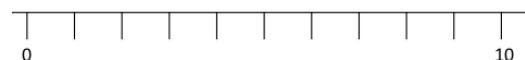
You choose...

$$B. 87 - 38 = 49$$

...what to use...

...to help you

Use...



A number line

$$C. 80 - 45 = 35$$

...to help you