

Fluent in Five

Questions and Answers

Year 2


Week 28

Year 2 – Week 28

This week in a nutshell:

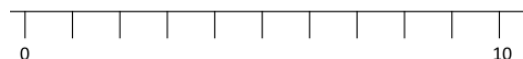
As with last week, Five Fluent in Five will focus on the full range of questions from the Key Stage 1 curriculum. Therefore, questions covering addition, subtraction, multiplication, division and fractions will focus. However, like this week there will continue to be a specific focus this week on more complex addition and subtraction calculations.

A. $80 - 10 =$



B. $48 + 27 =$

Use...



A number line

...to help you

C. $100 - 20 =$

You choose...

...what to use...

...to help you

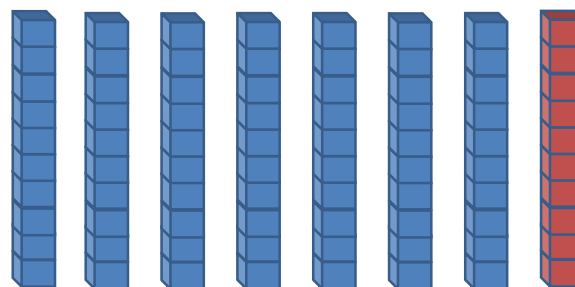


THIRD SPACE
LEARNING

Year 2

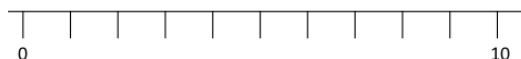
Week 28 – Day 1 (Answers)

$$A. 80 - 10 = 70$$



$$B. 48 + 27 = 75$$

Use...



A number line

...to help you

$$C. 100 - 20 = 80$$

You choose...

...what to use...

...to help you


Fluent in Five

Questions and Answers

Week 28

Day 2

A. $8 \times 10 =$



B. $22 \div 11 =$

Use...



Counters

...to help you

You choose...

C. $45 - 18 =$

...what to use...

...to help you




THIRD SPACE
LEARNING

Year 2

Week 28 – Day 2 (Answers)

$$A. 8 \times 10 = 80$$



Use...



Counters

$$B. 22 \div 11 = 2$$

...to help you

You choose...

$$C. 45 - 18 = 27$$

...what to use...

...to help you

Fluent in Five

Questions and Answers

Week 28

Day 3




THIRD SPACE
LEARNING

Year 2

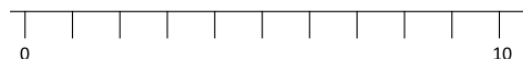
Week 28 – Day 3

A. $70 + 13 =$



B. $40 + ? = 84$

Use...



A number line

...to help you

C. $87 - 38 =$

You choose...

...what to use...

...to help you




THIRD SPACE
LEARNING

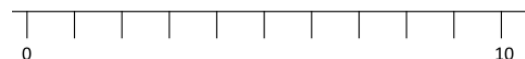
Year 2

Week 28 – Day 3 (Answers)

$$A. 70 + 13 = 83$$



Use...



A number line

$$B. 40 + 44 = 84$$

...to help you

You choose...

$$C. 87 - 38 = 49$$

...what to use...

...to help you

Fluent in Five

Questions and Answers

Week 28

Day 4

A. $7 + 8 + 2 =$

Use...



Number shapes

...to help you

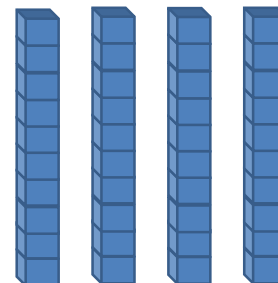
B. $90 - 22 =$

You choose...

...what to use...

...to help you

C. $\frac{2}{4}$ of 40 =





THIRD SPACE
LEARNING

Year 2

Week 28 – Day 4 (Answers)

$$A. 7 + 8 + 2 = 17$$

Use...



Number shapes

...to help you

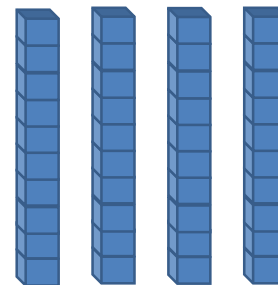
$$B. 90 - 22 = 68$$

You choose...

...what to use...

...to help you

$$C. \frac{2}{4} \text{ of } 40 = 20$$



Fluent in Five

Questions and Answers

Week 28

Day 5

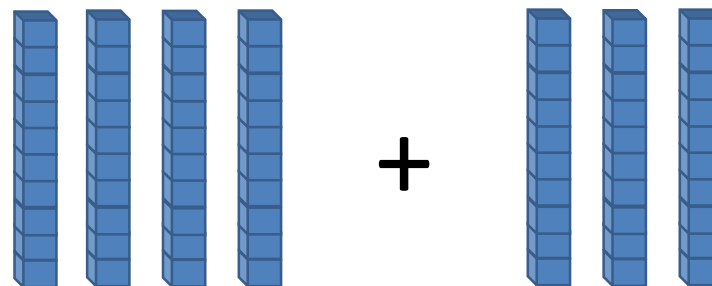


THIRD SPACE
LEARNING

Year 2

Week 28 – Day 5

A. $40 + 30 =$



B. $\frac{1}{2}$ of 12 =

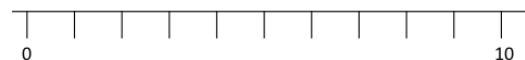
You choose...

...what to use...

...to help you

C. $81 - 38 =$

Use...



A number line

...to help you

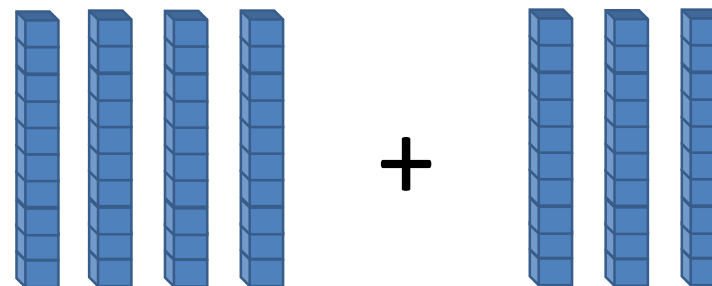


THIRD SPACE
LEARNING

Year 2

Week 28 – Day 5 (Answers)

$$A. 40 + 30 = 70$$



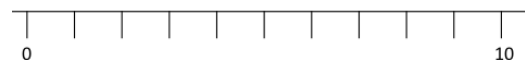
You choose...

$$B. \frac{1}{2} \text{ of } 12 = 6$$

...what to use...

...to help you

Use...



$$C. 81 - 38 = 43$$

A number line

...to help you